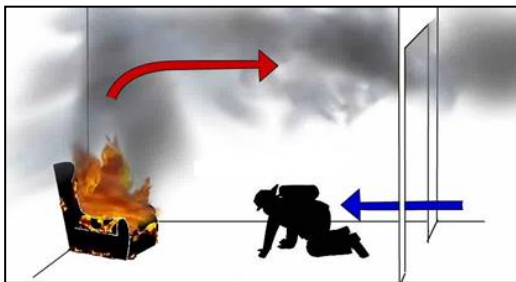


Heat Transfer Image Sort

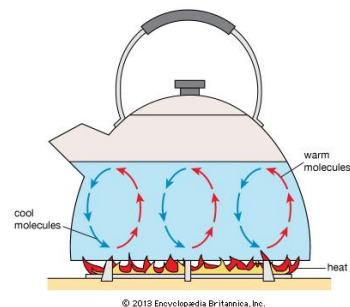
Name _____ Date ____ Period ____

Cut out the images below and sort them into categories of conduction, convection, or radiation. Explain how each image illustrates the specific type of heat transfer.


1.



2.

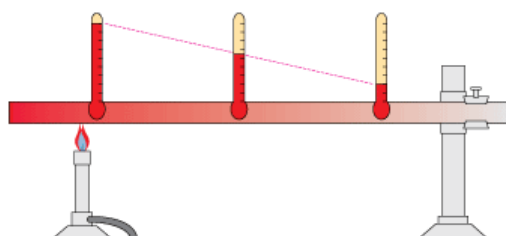


3.



© 2011 Encyclopædia Britannica, Inc.

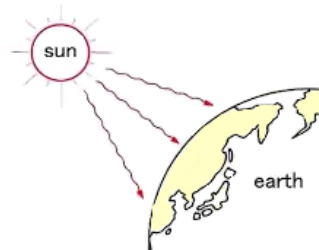
4.



5.



6.




7.




8.



9.



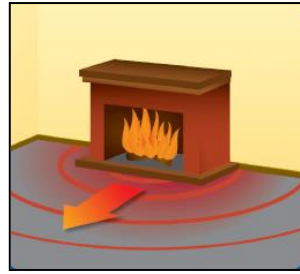
10.



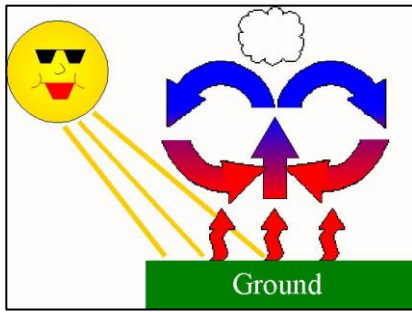
11.



12.



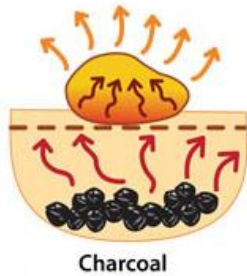
13.



14.



15.



16.



17.



18.



Cheese Melting on Hamburger

Heat Transfer Image Sort

Name _____ Date ____ Period ____

Numbers illustrating Conduction: _____

Explanation: _____

Numbers illustrating Convection: _____

Explanation: _____

Numbers illustrating Radiation: _____
